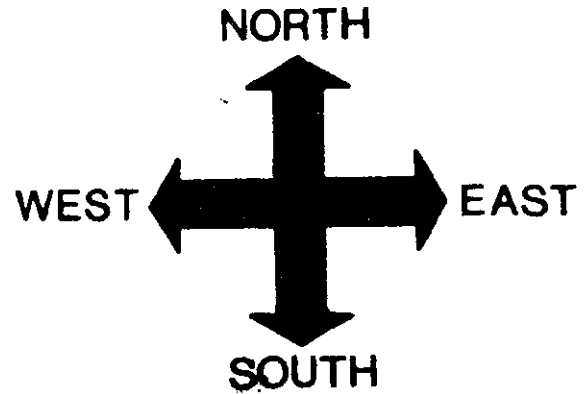


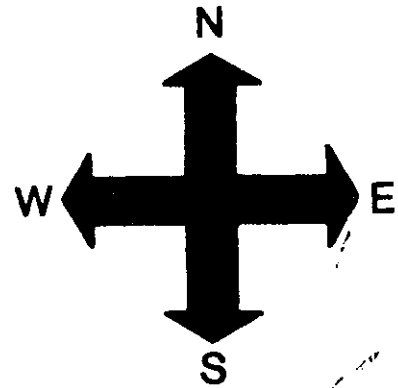
# A Compass Rose

This is a compass rose.  
A compass rose points north, south, east, and west.  
It helps you to read a map.

North is at the top of a compass rose.  
The arrow points to the North Pole.  
South is at the bottom of a compass rose.  
The arrow points to the South Pole.  
West is at the left.  
East is at the right.



Sometimes a compass rose looks like this.



N stands for \_\_\_\_\_.

S stands for \_\_\_\_\_.

E stands for \_\_\_\_\_.

W stands for \_\_\_\_\_.



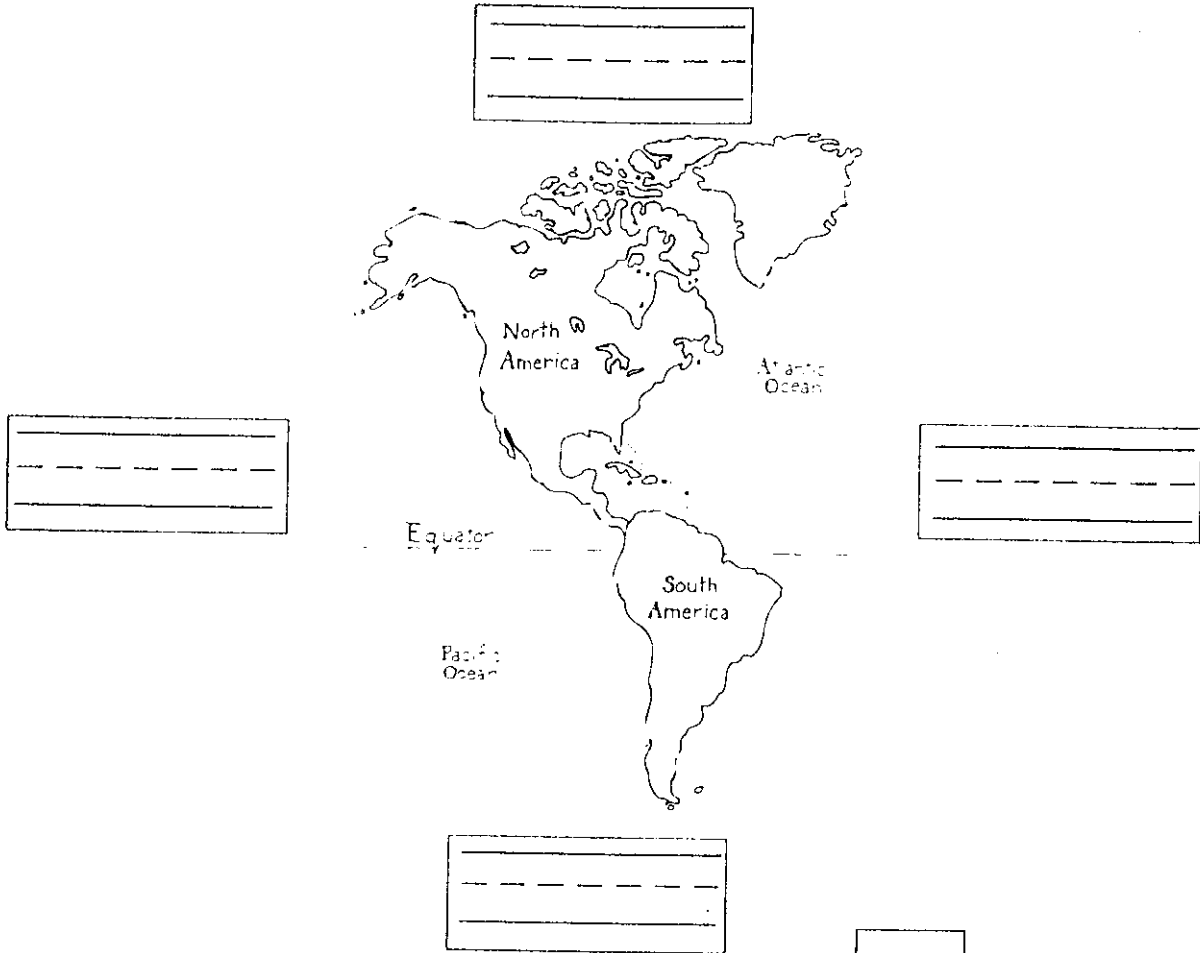
What would NE stand for?



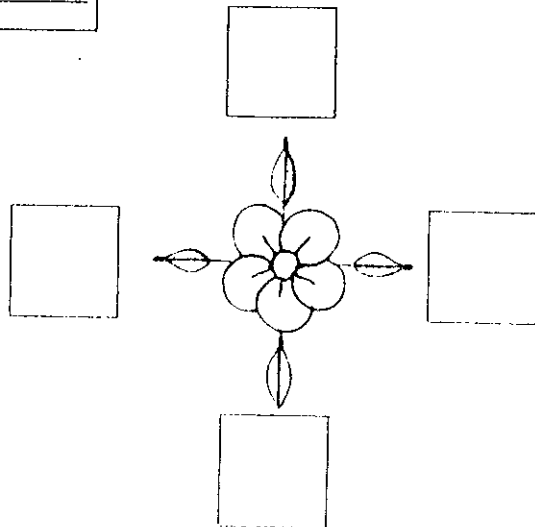
# Where Is It?

north    south    east    west

Write the four directions in the correct places on this map.



Write N, S, E, W in the correct places to show north, south, east, and west on this compass rose.



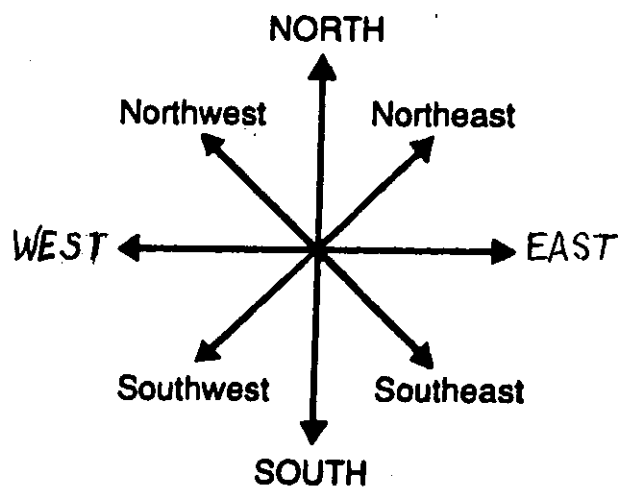
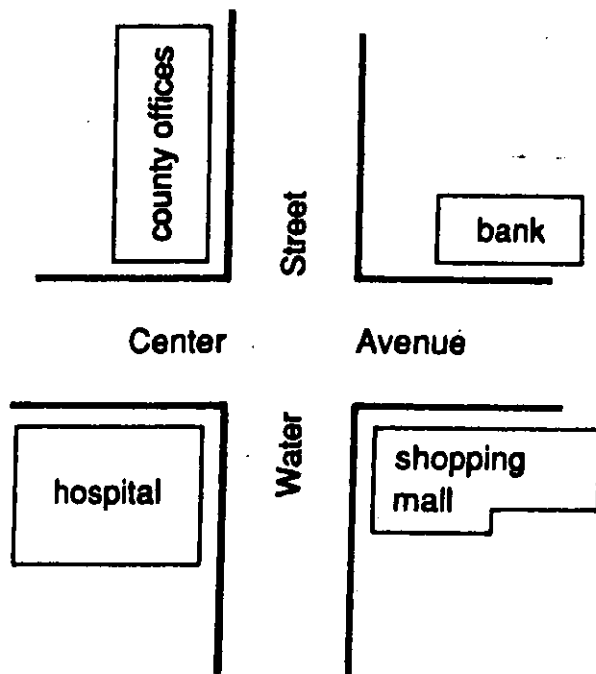


Name \_\_\_\_\_



# Between North and East

This map shows where two roads cross. Find the bank.  
It is east of Water Street and north of Center Avenue. It is on  
the northeast corner of the two roads.



1. Sometimes a compass rose has in-between directions like a crossroad. Write the four in-between directions here.

\_\_\_\_\_

\_\_\_\_\_

2. What is on the southwest corner of the map? \_\_\_\_\_

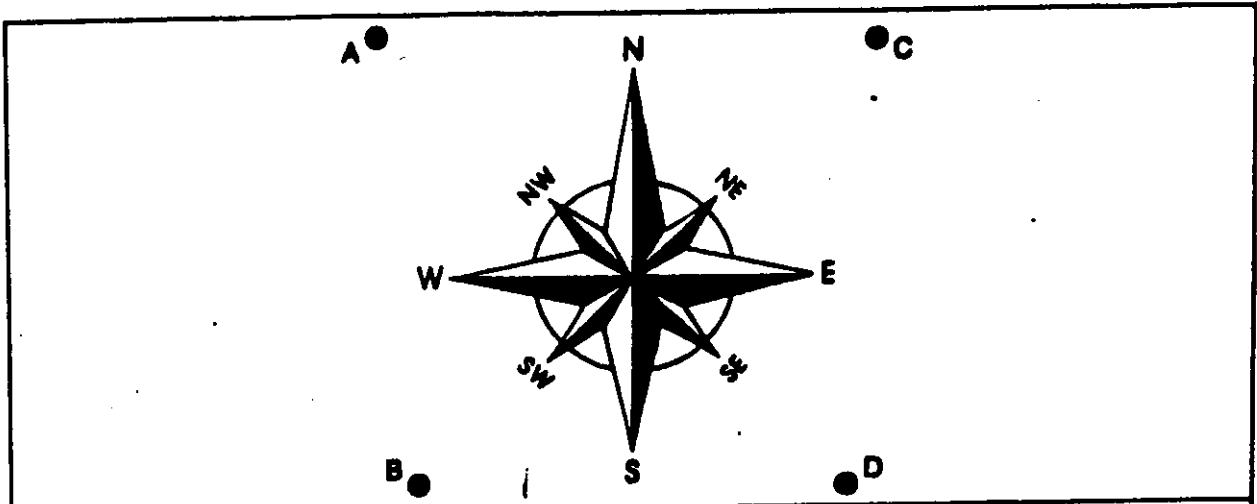
3. At what corner is the shopping mall? \_\_\_\_\_



What do the letters NE, SE, SW, and NW stand for?

# Finding Directions

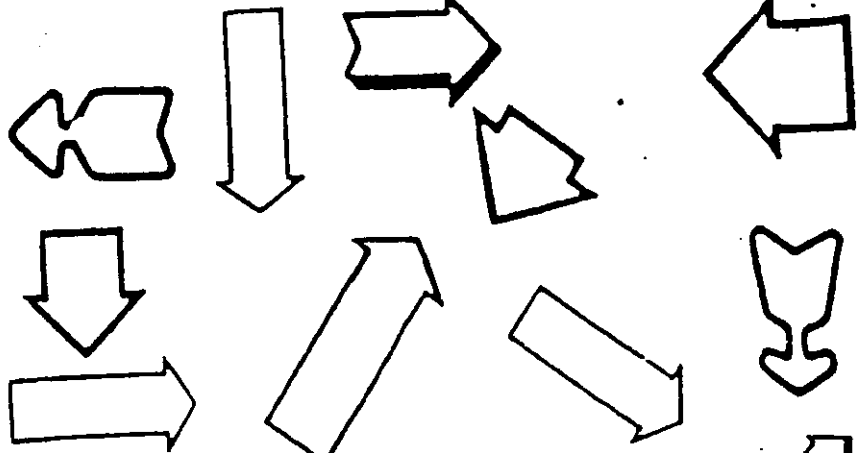
► Use the compass rose to find the direction from one place to another place. Write your answers on the chart. The first one is done for you.



FROM	TO	DIRECTION
D	C	<i>North</i>
A	B	
B	D	
C	D	
D	B	
B	A	
A	D	
C	B	
D	A	
B	C	

# COLORED ARROWS

NAME \_\_\_\_\_



1. Color all arrows pointing NORTH red.
2. Color all arrows pointing SOUTH blue.
3. Color all arrows pointing EAST green.
4. Color all arrows pointing WEST yellow.
5. Color all the arrows pointing SOUTHEAST brown.
6. Color all the arrows pointing NORTHWEST purple.
7. Color all the arrows pointing NORTHEAST orange.
8. Color all the arrows pointing SOUTHWEST pink.

